

Name: _____ Learning Mentor Group: _____

Teacher's Name: _____ Class: _____

Discovery Faculty Extended Learning Project

Geography Year 8

Booklet 2 Cities in the developing world



Task number	Homework due date
1	
2	
3	
4	
5	

Task 1

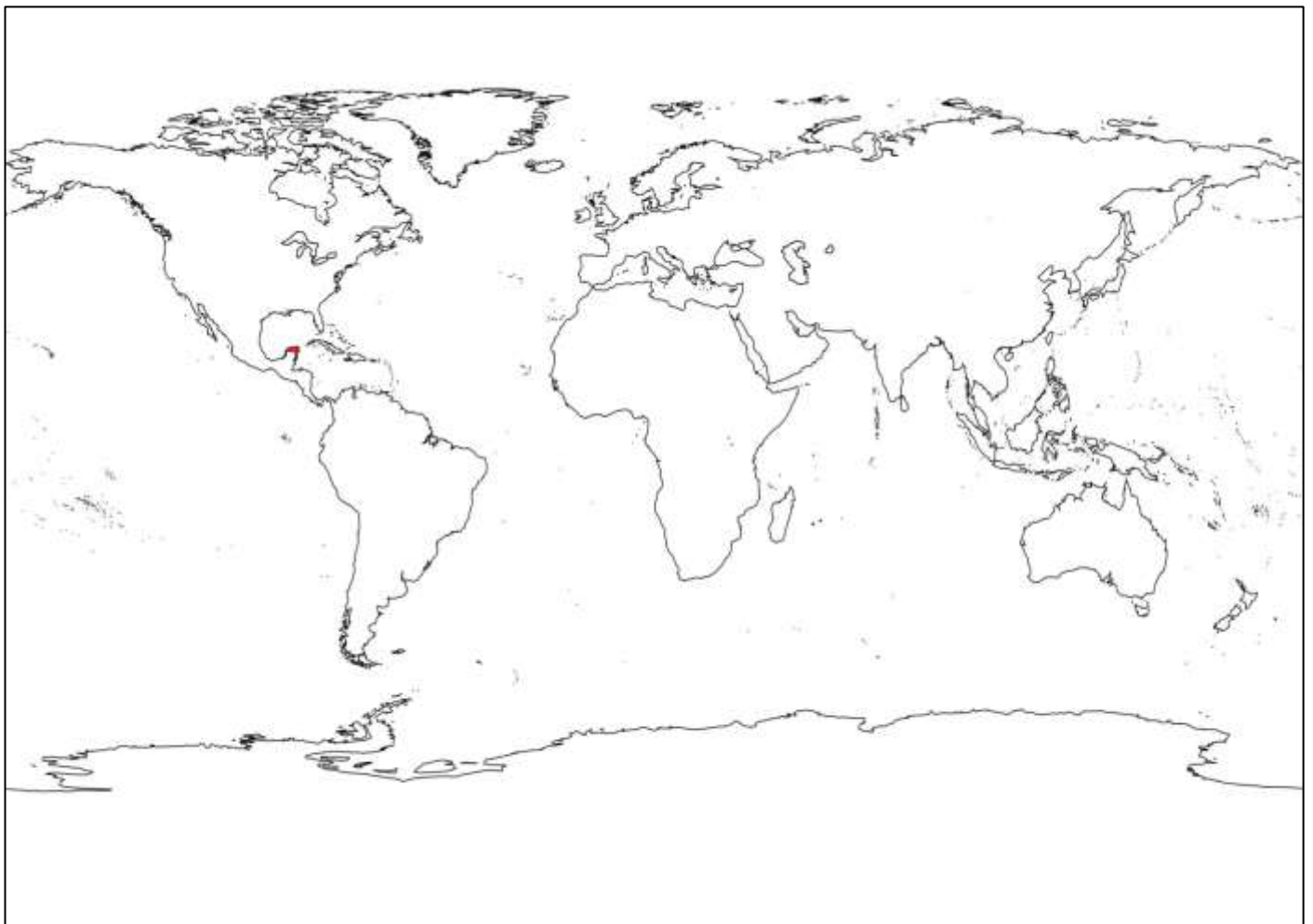
Remember: Labels should be written horizontally (not at an angle). Arrows should be drawn with a ruler.

Label the map below with the names of these continents:

Europe, Asia, Africa, North America, South America, Oceania, Antarctica

Label these oceans:

Atlantic Ocean, Pacific Ocean, Indian Ocean, Arctic Ocean, Southern Ocean.



Task 2

The following table contains the 10 largest cities in world in rank order. City number one - Shanghai - has the largest population in 2014. Complete the table with the information required.

The following websites might be useful:


http://en.wikipedia.org/wiki/List_of_cities_proper_by_population

City	Population	Country	Continent	Is it the capital city?
Shanghai	24 million			
Karachi	23 million			
Beijing	21 million			
Delhi	18 million			
Lagos	17 million			
Tianjin	15 million			
Istanbul	14 million			
Tokyo	13 million			
Guangzhou	13 million			
Mumbai	12 million			

EXTENSION: What do you notice about the 10 largest cities in the world today? Can you see any patterns?

Task 3

Create a fact file on ONE of the cities in the table in task 2.



Country flag

Name of city: _____

Country: _____

Continent: _____

Is it the capital city? If not what city is? _____

City population: _____

London's population is 8 million. How many times bigger than London is your

chosen city? _____

City area (in square kilometres): _____

City population density (the number of people per square kilometre):

Language(s): _____

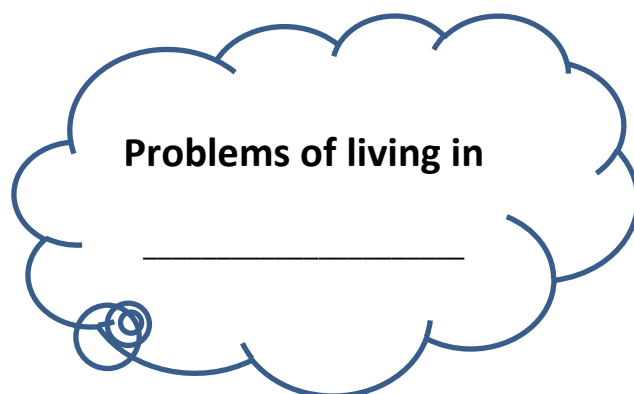
Currency: _____

Famous landmarks: _____

Task 4

Research the other side of life in your chosen city.

What are the problems of living in one of the world's largest cities? Create a spider diagram of the negative points below. Try to add facts and figures to back up your points. Then chose one problem to write about on the next page.



HINT: Think about homes – are there enough? Think about clean water and sanitation. Think about transport. Think about pollution. Think about crime. Think about jobs.

Task 5

Explain ONE of the problems that you identified in task 5. Remember to explain the knock on effects with connectives like those in the box below.

Because...

This means that...

This leads to...

As a result...

Consequently...

Therefore...

One problem of living in _____ is _____

This problem has been caused by _____

The knock on effects of this are _____