

Name: \_\_\_\_\_ Learning Mentor Group: \_\_\_\_\_

Teacher's Name: \_\_\_\_\_ Class: \_\_\_\_\_

# Discovery Faculty Extended Learning Project

## Geography Year 8

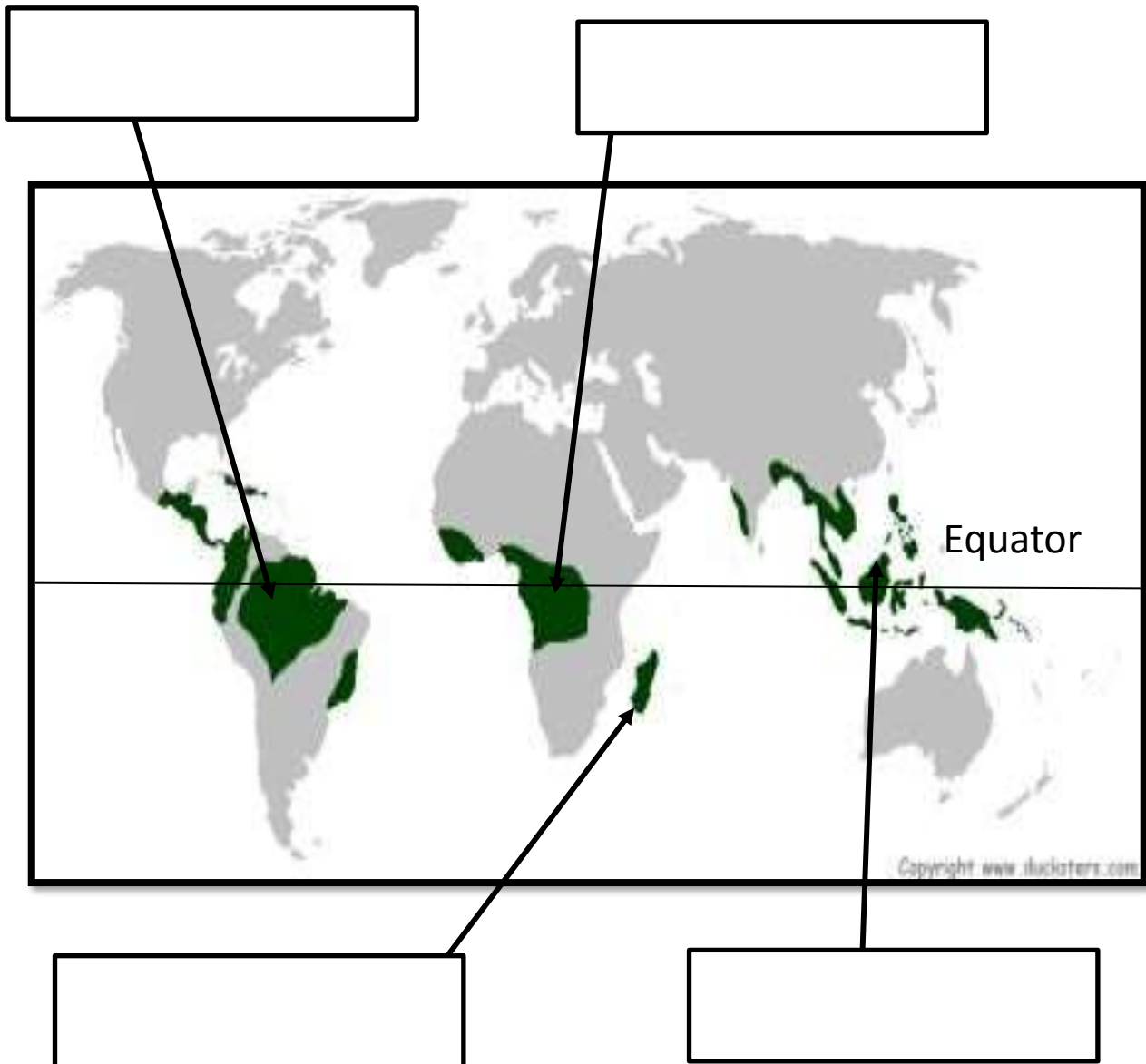
### Booklet 1 Rainforests



Task number	Homework due date
1	
2	
3	
4	
5	

### Task 1

Name the rainforest identified on the world map below.




List some countries where rainforests are found.

Country	Continent

Task 2

On this diagram of a rainforest - label 1) the emergent trees, 2) the canopy, 3) the under canopy and 4) the shrub layer. Then colour the picture.



Why are emergent trees so tall?

---

---

---

Why do rainforest plants have big leaves?

---

---

---

Why do the trees need buttress roots?

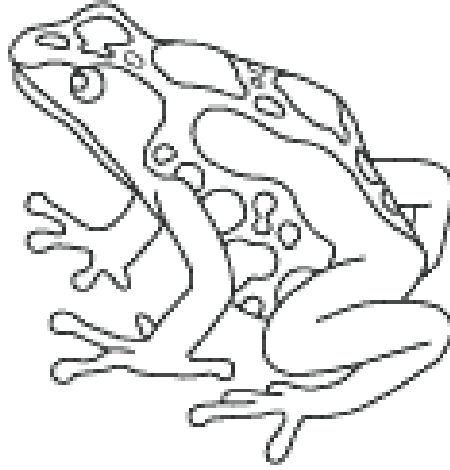
---

---

---

### Task 3

One animal that has adapted to live in the rainforest is a poison dart frog.  
Label the diagram below with how it survives in the rainforest



Select another rainforest animal, like a stick insect, spiders, bats, jaguars etc.  
Draw or stick a picture below and label its adaptations to the rainforest



## Task 4

The rate of deforestation around the world is equivalent to 50 football pitches every minute.

Below are some the reasons why we are cutting down trees so rapidly. List the products that the rainforest supplies. They get harder as they go down.



Extension: What other products come from tropical rainforests?

---

---

---

